



EDUCADITOS

MATEMÁTICA

SUMAR Y RESTAR


PRIMARIA

1°

SUMAR


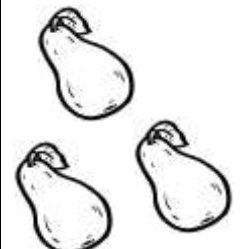
El signo que usamos para sumar es +.

- Ya nacieron los pollitos, ayuda a contarlos y completa los recuadros con los números según corresponda:






2 + 1 = 3

- COMPLETA los cuadrados.


	
2	<input type="text"/>



hacen



<input type="text"/>

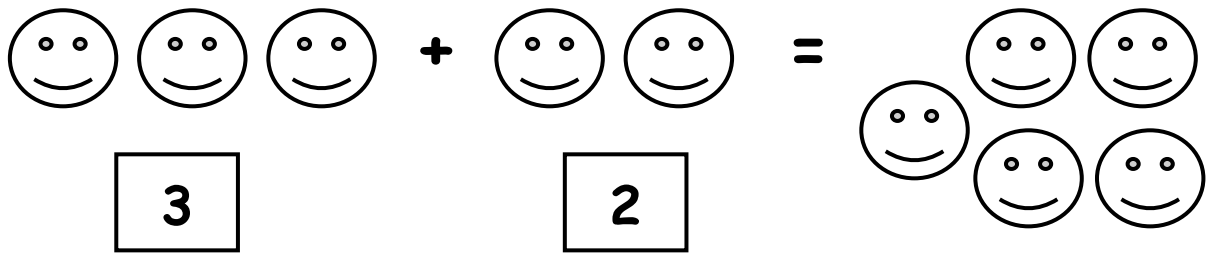
	
<input type="text"/>	<input type="text"/>

hacen


<input type="text"/>

	
<input type="text"/>	<input type="text"/>


<input type="text"/>



$$\boxed{1} + \boxed{4} = \boxed{}$$

$$\boxed{5} + \boxed{3} = \boxed{}$$

$$\boxed{2} + \boxed{2} = \boxed{}$$

$$\boxed{7} + \boxed{2} = \boxed{}$$

$$\boxed{4} + \boxed{3} = \boxed{}$$

$$\boxed{6} + \boxed{3} = \boxed{}$$

$$\boxed{5} + \boxed{1} = \boxed{}$$

$$\boxed{3} + \boxed{6} = \boxed{}$$

$$\boxed{3} + \boxed{4} = \boxed{}$$

$$\boxed{1} + \boxed{6} = \boxed{}$$

$$\boxed{2} + \boxed{3} = \boxed{}$$

$$\boxed{4} + \boxed{1} = \boxed{}$$

$$\boxed{3} + \boxed{0} = \boxed{}$$

$$\boxed{5} + \boxed{4} = \boxed{}$$

$$\boxed{4} + \boxed{5} = \boxed{}$$

$$\boxed{3} + \boxed{2} = \boxed{}$$

$$\boxed{7} + \boxed{0} = \boxed{}$$

$$\boxed{4} + \boxed{4} = \boxed{}$$

$$\boxed{1} + \boxed{5} = \boxed{}$$

$$\boxed{4} + \boxed{3} = \boxed{}$$

$$\boxed{3} + \boxed{3} = \boxed{}$$

$$\boxed{6} + \boxed{2} = \boxed{}$$

$$\boxed{5} + \boxed{4} = \boxed{}$$


$$\boxed{6} + \boxed{3} = \boxed{}$$

$$\boxed{4} + \boxed{2} = \boxed{}$$


$$\boxed{2} + \boxed{0} = \boxed{}$$

RESTAR


El maestro Carlos comenzará su clase.
Si son 20 alumnos y faltaron dos.
¿Cuántos asistieron?




Asistieron _____



• OBSERVA y RESTA.



$$\boxed{6} - \boxed{3} = \boxed{3}$$



$$\boxed{2} - \boxed{1} = \boxed{1}$$

$$\boxed{4} - \boxed{2} = \boxed{}$$

$$\boxed{9} - \boxed{3} = \boxed{}$$

$$\boxed{8} - \boxed{4} = \boxed{}$$

$$\boxed{5} - \boxed{1} = \boxed{}$$

$$\boxed{9} - \boxed{5} = \boxed{}$$

$$\boxed{7} - \boxed{2} = \boxed{}$$

$$\boxed{6} - \boxed{3} = \boxed{}$$

$$\boxed{9} - \boxed{2} = \boxed{}$$

$$\boxed{6} - \boxed{5} = \boxed{}$$

$$\boxed{8} - \boxed{2} = \boxed{}$$

$$\boxed{3} - \boxed{2} = \boxed{}$$

$$\boxed{4} - \boxed{3} = \boxed{}$$

- REALIZA las siguientes adiciones:

$$\begin{array}{r} 1 \quad 8 \quad + \\ 3 \quad 1 \\ \hline \end{array}$$

$$\begin{array}{r} 1 \quad 2 \quad + \\ 4 \quad 7 \\ \hline \end{array}$$

$$\begin{array}{r} 1 \quad 3 \quad + \\ 4 \quad 3 \\ \hline \end{array}$$

$$\begin{array}{r} 2 \quad 8 \quad + \\ 1 \quad 0 \\ \hline \end{array}$$

$$\begin{array}{r} 4 \quad 2 \quad + \\ 2 \quad 7 \\ \hline \end{array}$$

$$\begin{array}{r} 5 \quad 2 \quad + \\ 1 \quad 1 \\ \hline \end{array}$$

$$\begin{array}{r} 4 \quad 6 \quad + \\ 2 \quad 2 \\ \hline \end{array}$$

$$\begin{array}{r} 2 \quad 8 \quad + \\ 3 \quad 0 \\ \hline \end{array}$$

$$\begin{array}{r} 4 \quad 1 \quad + \\ 2 \quad 1 \\ \hline \end{array}$$

$$\begin{array}{r} 8 \quad 1 \quad + \\ 1 \quad 2 \\ \hline \end{array}$$

$$\begin{array}{r} 5 \quad 2 \quad + \\ 3 \quad 0 \\ \hline \end{array}$$

$$\begin{array}{r} 2 \quad 4 \quad + \\ 1 \quad 1 \\ \hline \end{array}$$

$$\begin{array}{r} 1 \quad 8 \quad + \\ 1 \quad 1 \\ \hline \end{array}$$

$$\begin{array}{r} 5 \quad 3 \quad + \\ 1 \quad 4 \\ \hline \end{array}$$

$$\begin{array}{r} 1 \quad 0 \quad + \\ 1 \quad 0 \\ \hline \end{array}$$

$$\begin{array}{r} 1 \quad 9 \quad + \\ 2 \quad 0 \\ \hline \end{array}$$

$$\begin{array}{r} 2 \quad 0 \quad + \\ 1 \quad 5 \\ \hline \end{array}$$

$$\begin{array}{r} 1 \quad 6 \quad + \\ 1 \quad 2 \\ \hline \end{array}$$

$$\begin{array}{r} 2 \quad 2 \quad + \\ 1 \quad 0 \\ \hline \end{array}$$

$$\begin{array}{r} 1 \quad 1 \quad + \\ \quad \quad 5 \\ \hline \end{array}$$

$$\begin{array}{r} 2 \quad 3 \quad + \\ 1 \quad 4 \\ \hline \end{array}$$

$$\begin{array}{r} 1 \quad 0 \quad + \\ 1 \quad 2 \\ \hline \end{array}$$

$$\begin{array}{r} 8 \quad 0 \quad + \\ 1 \quad 5 \\ \hline \end{array}$$

$$\begin{array}{r} 7 \quad 5 \quad + \\ 2 \quad 0 \\ \hline \end{array}$$

$$\begin{array}{r} 6 \quad 0 \quad + \\ 2 \quad 4 \\ \hline \end{array}$$

$$\begin{array}{r} 2 \quad 1 \quad + \\ 4 \quad 0 \\ \hline \end{array}$$

$$\begin{array}{r} 3 \quad 0 \quad + \\ 2 \quad 1 \\ \hline \end{array}$$

- REALIZA las siguientes sustracciones:

$$\begin{array}{r} 1 \quad 8 \quad - \\ \quad 4 \\ \hline \end{array}$$

$$\begin{array}{r} 1 \quad 6 \quad - \\ \quad 4 \\ \hline \end{array}$$

$$\begin{array}{r} 1 \quad 8 \quad - \\ \quad 4 \\ \hline \end{array}$$

$$\begin{array}{r} 1 \quad 2 \quad - \\ \quad 2 \\ \hline \end{array}$$

$$\begin{array}{r} 1 \quad 5 \quad - \\ \quad 2 \\ \hline \end{array}$$

$$\begin{array}{r} 1 \quad 9 \quad - \\ \quad 7 \\ \hline \end{array}$$

$$\begin{array}{r} 1 \quad 7 \quad - \\ \quad 3 \\ \hline \end{array}$$

$$\begin{array}{r} 1 \quad 3 \quad - \\ \quad 2 \\ \hline \end{array}$$

$$\begin{array}{r} 1 \quad 9 \quad - \\ \quad 4 \\ \hline \end{array}$$

$$\begin{array}{r} 1 \quad 5 \quad - \\ \quad 4 \\ \hline \end{array}$$

$$\begin{array}{r} 1 \quad 8 \quad - \\ \quad 7 \\ \hline \end{array}$$

$$\begin{array}{r} 1 \quad 7 \quad - \\ \quad 5 \\ \hline \end{array}$$

$$\begin{array}{r} 1 \quad 9 \quad - \\ \quad 9 \\ \hline \end{array}$$

$$\begin{array}{r} 1 \quad 1 \quad - \\ \quad 1 \\ \hline \end{array}$$

$$\begin{array}{r} 1 \quad 8 \quad - \\ \quad 3 \\ \hline \end{array}$$

$$\begin{array}{r} 1 \quad 0 \quad - \\ 1 \quad 0 \\ \hline \end{array}$$

$$\begin{array}{r} 1 \quad 4 \quad - \\ \quad 4 \\ \hline \end{array}$$

$$\begin{array}{r} 1 \quad 9 \quad - \\ 1 \quad 0 \\ \hline \end{array}$$

$$\begin{array}{r} 1 \quad 4 \quad - \\ \quad 3 \\ \hline \end{array}$$

$$\begin{array}{r} 1 \quad 9 \quad - \\ \quad 3 \\ \hline \end{array}$$

$$\begin{array}{r} 1 \quad 8 \quad - \\ \quad 2 \\ \hline \end{array}$$

$$\begin{array}{r} 1 \quad 6 \quad - \\ \quad 0 \\ \hline \end{array}$$

$$\begin{array}{r} 1 \quad 7 \quad - \\ \quad 6 \\ \hline \end{array}$$

$$\begin{array}{r} \\ \\ \hline \end{array}$$

$$\begin{array}{r} 1 \quad 3 \quad - \\ \quad 6 \\ \hline \end{array}$$

$$\begin{array}{r} 1 \quad 1 \quad - \\ \quad 2 \\ \hline \end{array}$$

$$\begin{array}{r} 1 \quad 8 \quad - \\ \quad 0 \\ \hline \end{array}$$

- REALIZA los siguientes ejercicios:

$$\begin{array}{r} 7 \quad 2 \quad + \\ 1 \quad 2 \\ \hline \end{array}$$

$$\begin{array}{r} 4 \quad 5 \quad + \\ 2 \quad 6 \\ \hline \end{array}$$

$$\begin{array}{r} 4 \quad 5 \quad + \\ 2 \quad 6 \\ \hline \end{array}$$

$$\begin{array}{r} 4 \quad 5 \quad + \\ 1 \quad 3 \\ \hline \end{array}$$

$$\begin{array}{r} 4 \quad 8 \quad + \\ 9 \quad 6 \\ \hline \end{array}$$

$$\begin{array}{r} 4 \quad 6 \quad + \\ 4 \quad 2 \\ \hline \end{array}$$

$$\begin{array}{r} 1 \quad 2 \quad + \\ 4 \quad 8 \\ \hline \end{array}$$

$$\begin{array}{r} 7 \quad 6 \quad + \\ 9 \quad 0 \\ \hline \end{array}$$

$$\begin{array}{r} 7 \quad 8 \quad + \\ 4 \quad 6 \\ \hline \end{array}$$

$$\begin{array}{r} 4 \quad 5 \quad + \\ 8 \quad 9 \\ \hline \end{array}$$

$$\begin{array}{r} 6 \quad 8 \quad + \\ 3 \quad 5 \\ \hline \end{array}$$

$$\begin{array}{r} 4 \quad 2 \quad + \\ 2 \quad 6 \\ \hline \end{array}$$

$$\begin{array}{r} 4 \quad 5 \quad + \\ 4 \quad 6 \\ \hline \end{array}$$

$$\begin{array}{r} 7 \quad 9 \quad + \\ 8 \quad 2 \\ \hline \end{array}$$

$$\begin{array}{r} 4 \quad 6 \quad + \\ 4 \quad 6 \\ \hline \end{array}$$

$$\begin{array}{r} 4 \quad 8 \quad - \\ 3 \quad 9 \\ \hline \end{array}$$

$$\begin{array}{r} 8 \quad 4 \quad - \\ 7 \quad 0 \\ \hline \end{array}$$

$$\begin{array}{r} 2 \quad 3 \quad - \\ 1 \quad 2 \\ \hline \end{array}$$

$$\begin{array}{r} 4 \quad 6 \quad - \\ 4 \quad 8 \\ \hline \end{array}$$

$$\begin{array}{r} 7 \quad 9 \quad - \\ 4 \quad 6 \\ \hline \end{array}$$

$$\begin{array}{r} 4 \quad 3 \quad - \\ 3 \quad 9 \\ \hline \end{array}$$

$$\begin{array}{r} 7 \quad 9 \quad - \\ 4 \quad 4 \\ \hline \end{array}$$

$$\begin{array}{r} 7 \quad 8 \quad - \\ 6 \quad 8 \\ \hline \end{array}$$

$$\begin{array}{r} 7 \quad 1 \quad - \\ 5 \quad 6 \\ \hline \end{array}$$

$$\begin{array}{r} 7 \quad 9 \quad - \\ 4 \quad 6 \\ \hline \end{array}$$

$$\begin{array}{r} 4 \quad 2 \quad - \\ 7 \quad 9 \\ \hline \end{array}$$

$$\begin{array}{r} 7 \quad 1 \quad - \\ 4 \quad 6 \\ \hline \end{array}$$

CUADROS DE DOBLE ENTRADA

+ 10	
100	
50	
123	
65	

+ 6	
92	
70	
63	
81	

+ 2	
104	
35	
28	
14	

+	4
145	
132	
104	

+	2
152	
147	
121	

-	3
116	
147	
120	

-	10
110	
128	
130	

+	3
112	
147	
123	

-	4
129	
140	
110	

• RESUELVE:

a) $143 + 85 =$

b) $225 + 113 =$

c) $136 + 143 =$

d) $140 + 80 =$

d) $122 + 49 =$

e) $125 + 30 =$

• RESUELVE:

$$\boxed{50} + \boxed{1} = \boxed{}$$

$$\boxed{50} + \boxed{2} = \boxed{}$$

$$\boxed{50} + \boxed{3} = \boxed{}$$

$$\boxed{50} + \boxed{4} = \boxed{}$$

$$\boxed{50} + \boxed{5} = \boxed{}$$

$$\boxed{50} + \boxed{6} = \boxed{}$$

$$\boxed{50} + \boxed{7} = \boxed{}$$

$$\boxed{50} + \boxed{8} = \boxed{}$$

$$\boxed{50} + \boxed{9} = \boxed{}$$

$$\boxed{50} - \boxed{1} = \boxed{}$$

$$\boxed{50} - \boxed{2} = \boxed{}$$

$$\boxed{50} - \boxed{3} = \boxed{}$$

$$\boxed{50} - \boxed{4} = \boxed{}$$

$$\boxed{50} - \boxed{5} = \boxed{}$$

$$\boxed{50} - \boxed{6} = \boxed{}$$

$$\boxed{50} - \boxed{7} = \boxed{}$$

$$\boxed{50} - \boxed{8} = \boxed{}$$

$$\boxed{50} - \boxed{9} = \boxed{}$$

• RESUELVE:

$$\boxed{60} + \boxed{1} = \boxed{}$$

$$\boxed{60} + \boxed{1} = \boxed{}$$

$$\boxed{60} + \boxed{2} = \boxed{}$$

$$\boxed{60} - \boxed{2} = \boxed{}$$

$$\boxed{60} + \boxed{3} = \boxed{}$$

$$\boxed{600} - \boxed{3} = \boxed{}$$

$$\boxed{60} + \boxed{4} = \boxed{}$$

$$\boxed{60} - \boxed{4} = \boxed{}$$

$$\boxed{60} + \boxed{5} = \boxed{}$$

$$\boxed{60} - \boxed{5} = \boxed{}$$

$$\boxed{60} + \boxed{6} = \boxed{}$$

$$\boxed{60} - \boxed{6} = \boxed{}$$

$$\boxed{60} + \boxed{7} = \boxed{}$$

$$\boxed{60} - \boxed{7} = \boxed{}$$

$$\boxed{60} + \boxed{8} = \boxed{}$$

$$\boxed{60} - \boxed{8} = \boxed{}$$

$$\boxed{60} + \boxed{9} = \boxed{}$$

$$\boxed{60} - \boxed{9} = \boxed{}$$