



PARTES DE UNA FRACCION

Si dividimos un objeto o unidad en varias partes iguales, a cada una de ellas, o a un grupo de esas partes, se las denomina fracción. Las fracciones están formadas por dos números: el numerador y el denominador.

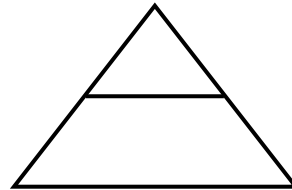
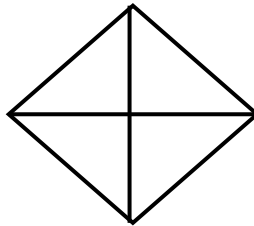
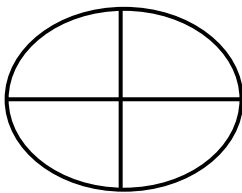
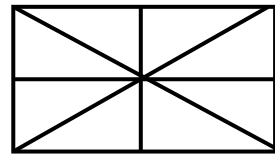
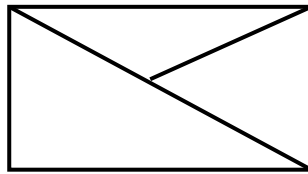
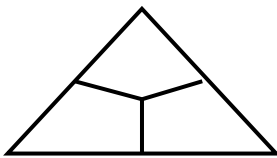


$$\frac{3}{10}$$

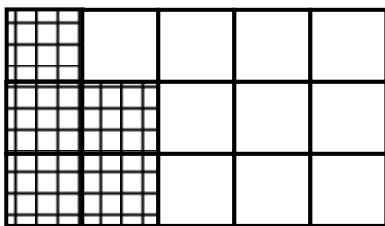
← Numerador
← Denominador

Se lee: "Tres décimos"

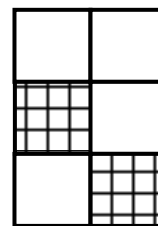
- COLOREA las figuras que están divididas en partes iguales:



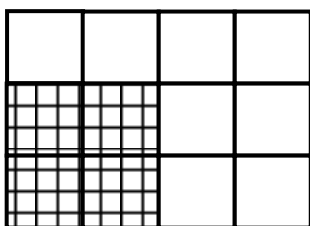
- ESCRIBE la fracción y cómo se lee:



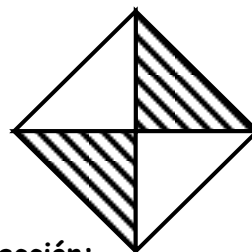
Fracción _____
SE lee: _____



Fracción _____
Se lee _____



Fracción: _____
Se lee: _____



Fracción: _____
Se lee: _____

• **GRAFICA:**

a) $\frac{5}{6}$

b) $\frac{3}{10}$

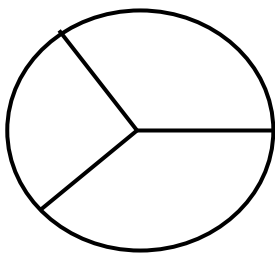
c) $\frac{1}{3}$

d) $\frac{4}{11}$

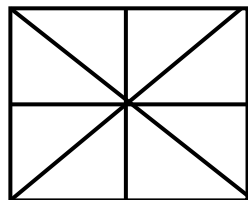
e) $\frac{2}{7}$

f) $\frac{1}{9}$

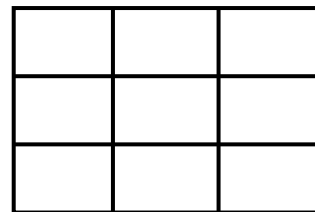
• **COLOREA** las partes indicadas:



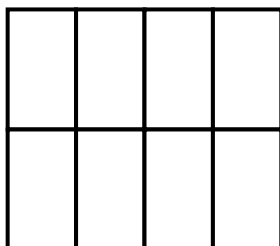
$\frac{1}{3}$



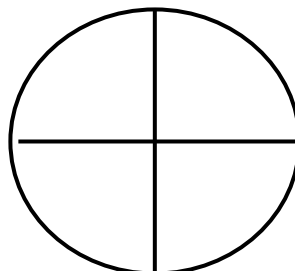
$\frac{3}{8}$




$\frac{5}{9}$



$\frac{8}{8}$



$\frac{4}{4}$



$\frac{5}{5}$