



EDUCADITOS

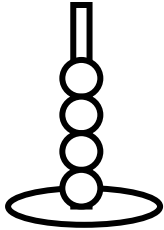
MATEMÁTICA



MAYOR QUE Y MENOR QUE


PRIMARIA

• CUENTA y COMPLETA:

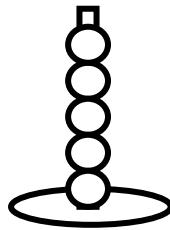


4

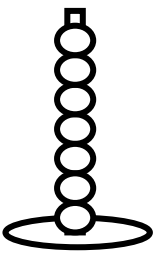
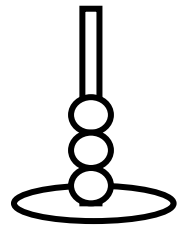
es menor que



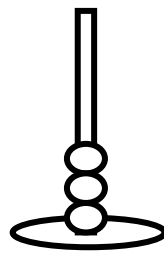
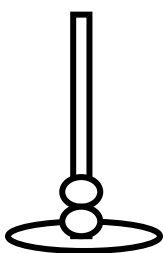
5



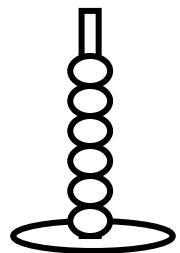
es _____ que



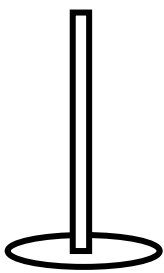
es _____ que



es _____ que

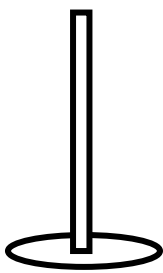


• DIBUJA y COMPLETA:

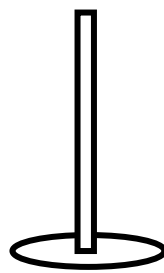


5

es _____ que

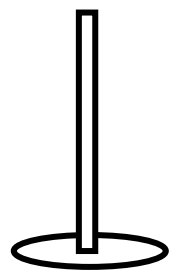


2

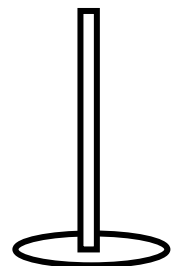
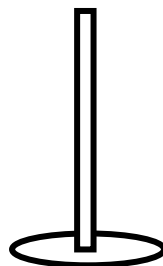
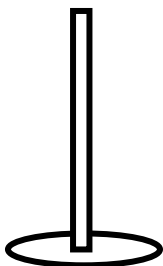
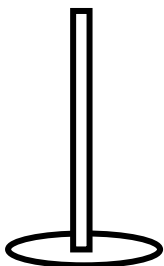


3

es _____ que



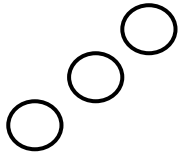
1




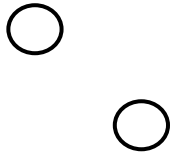
6 es _____ que 4

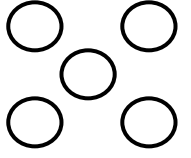
7 es _____ que 4


• COMPLETA:


	3
-----------------------------------------------------------------------------------	----------

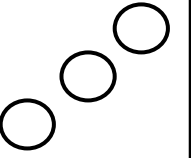



2	
----------	-------------------------------------------------------------------------------------

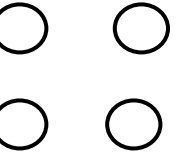
	
-----------------------------------------------------------------------------------	--

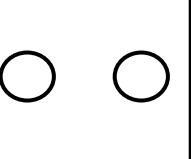



	
--	-------------------------------------------------------------------------------------

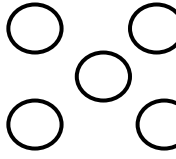
	
------------------------------------------------------------------------------------	--





	
--	--------------------------------------------------------------------------------------

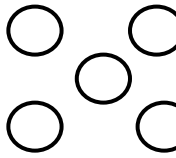
	
-------------------------------------------------------------------------------------	--

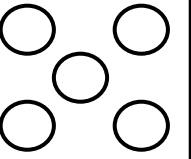



	
--	---------------------------------------------------------------------------------------

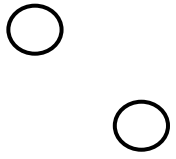
	
-------------------------------------------------------------------------------------	--





	
--	---------------------------------------------------------------------------------------

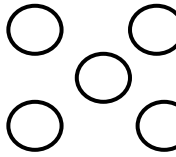
	
-------------------------------------------------------------------------------------	--

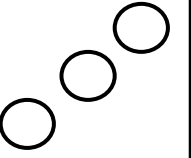



	
--	---------------------------------------------------------------------------------------

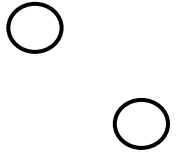
	
-------------------------------------------------------------------------------------	--



	
--	---------------------------------------------------------------------------------------

	
-------------------------------------------------------------------------------------	--



	
--	---------------------------------------------------------------------------------------

MAYOR O MENOR

- COLOCAR $>$, $<$ ó $=$ que:

150 _____
 132 _____
 249 _____
 148 _____
 121 _____
 182 _____
 167 _____
 169 _____
 138 _____
 201 _____
 396 _____

151
 201
 147
 184
 112
 146
 147
 196
 183
 289
 265

109 _____
 198 _____
 166 _____
 109 _____
 163 _____
 132 _____
 149 _____
 248 _____
 259 _____
 120 _____
 233 _____

119
 249
 166
 190
 120
 201
 131
 122
 259
 120
 486